





Name _____

Date _____



MONEY PROBLEMS SHEET 1A

Captain is having a yard sale of some of his toys.

soft toy cat	basketball	toy car	tractor
			
3¢	8¢	5¢	10¢

- 1) Which toy is the cheapest? _____
- 2) Which toy is the most expensive? _____
- 3) How much does the cat and basketball cost? _____
- 4) How much does the tractor and car cost? _____
- 5) Which two toys could I buy for exactly 13¢?

6) Frazer has the coins below. Tick the toys he could buy.



cat	<input type="checkbox"/>
basketball	<input type="checkbox"/>
car	<input type="checkbox"/>
tractor	<input type="checkbox"/>

7) Sally buys the cat. She pays with a nickel.

How much money will she have left? _____